



National
Qualifications
2018

X713/76/02

**Chemistry
Section 1 — Questions**

MONDAY, 21 MAY

9:00 AM – 11:30 AM

Instructions for the completion of Section 1 are given on *page 02* of your question and answer booklet X713/76/01.

Record your answers on the answer grid on *page 03* of your question and answer booklet.

You may refer to the Chemistry Data Booklet for Higher and Advanced Higher.

Before leaving the examination room you must give your question and answer booklet to the Invigilator; if you do not, you may lose all the marks for this paper.

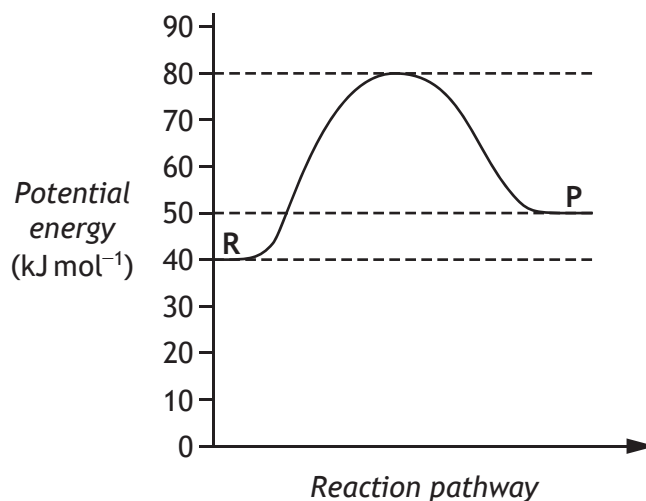


* X 7 1 3 7 6 0 2 *

SECTION 1 — 20 marks

Attempt ALL questions

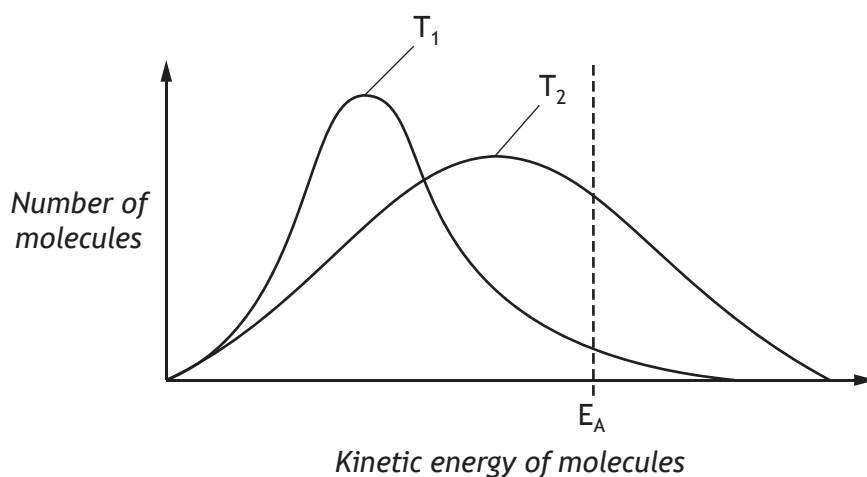
1. The potential energy diagram below refers to the reversible reaction involving reactants R and products P.



What is the enthalpy change, in kJ mol^{-1} , for the reverse reaction?

- A -40
B -10
C +10
D +30
2. The relative rate of a reaction which reached completion in 1 minute 40 seconds is
- A 0.010 s^{-1}
B 0.714 s^{-1}
C 0.010 min^{-1}
D 0.714 min^{-1} .

3.



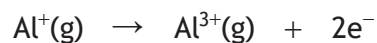
Which of the following is the correct interpretation of the above energy distribution diagram for a reaction as the temperature **decreases** from T_2 to T_1 ?

	Activation energy (E_A)	Number of successful collisions
A	remains the same	increases
B	decreases	decreases
C	decreases	increases
D	remains the same	decreases

4. The table shows the first three ionisation energies of aluminium.

Ionisation energy (kJ mol^{-1})		
First	Second	Third
578	1817	2745

Using this information, what is the enthalpy change, in kJ mol^{-1} , for the following reaction?



- A 1817
- B 2395
- C 4562
- D 5140

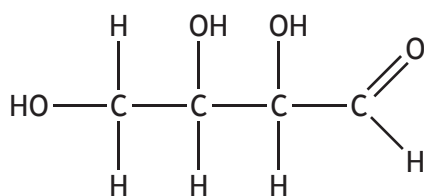
[Turn over

5. An element contains covalent bonding and London dispersion forces.

The element could be

- A boron
- B neon
- C sodium
- D sulfur.

6. Erythrose is a chemical that is known to kill cancer cells.

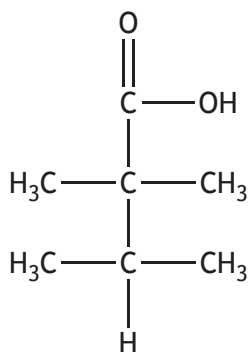


erythrose

The two functional groups present in erythrose are

- A carboxyl and ester
- B carbonyl and ester
- C carbonyl and hydroxyl
- D carboxyl and hydroxyl.

7.



The name of the above compound is

- A 2,2,3-trimethylbutanoic acid
- B 2,3,3-trimethylbutanoic acid
- C 1,1,2,2-tetramethylpropanoic acid
- D 2,2,3,3-tetramethylpropanoic acid.

8. Which of the following is an isomer of pentan-3-ol?

- A $\text{CH}_3\text{CH}_2\text{CH}(\text{OH})\text{CH}_2\text{CH}_3$
- B $\text{CH}_3\text{CHCHCH}_2\text{CH}_2\text{OH}$
- C $\text{CH}_3\text{CHCHCH}(\text{OH})\text{CH}_3$
- D $\text{CH}_3\text{CH}(\text{CH}_3)\text{CH}_2\text{CH}_2\text{OH}$


9. Oxidation of 4-methylpentan-2-ol to the corresponding ketone results in the alcohol

- A losing 2 g per mole
- B gaining 2 g per mole
- C losing 16 g per mole
- D gaining 16 g per mole.

10. Essential amino acids are defined as the amino acids which

- A are necessary for building proteins
- B humans must acquire through their diet
- C plants cannot synthesise for themselves
- D are produced when any protein is hydrolysed.

11. A mixture of carbon monoxide and hydrogen can be converted into water and a mixture of hydrocarbons.



What is the general formula for the hydrocarbons produced?

- A $\text{C}_n\text{H}_{2n-2}$
- B C_nH_{2n}
- C $\text{C}_n\text{H}_{2n+1}$
- D $\text{C}_n\text{H}_{2n+2}$

12. A mixture of sodium chloride and sodium sulfate is known to contain 0.6 mol of chloride ions and 0.2 mol of sulfate ions.

How many moles of sodium ions are present?

- A 0.4
- B 0.5
- C 0.8
- D 1.0

13. Under the same conditions of temperature and pressure, which of the following gases would occupy the largest volume?
- A 0.20 g of hydrogen
 - B 0.44 g of carbon dioxide
 - C 0.60 g of neon
 - D 0.80 g of argon



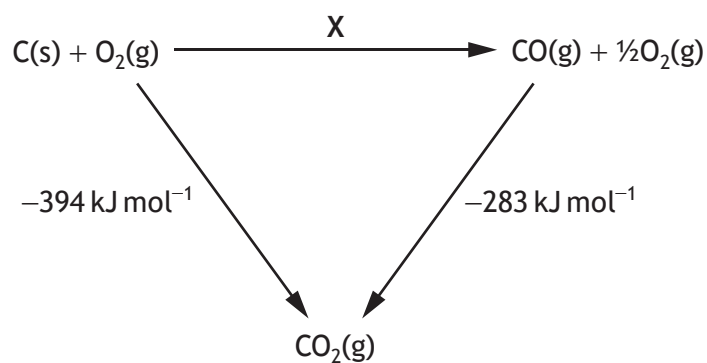
What volume of gas, in cm^3 , would be obtained by reaction between 100 cm^3 of ammonia gas and excess copper(II) oxide?

All volumes are measured at atmospheric pressure and 20°C .

- A 50
 - B 100
 - C 200
 - D 400
15. $\text{Cl}_2(\text{g}) + \text{H}_2\text{O}(\ell) \rightleftharpoons \text{Cl}^-(\text{aq}) + \text{ClO}^-(\text{aq}) + 2\text{H}^+(\text{aq})$
- The addition of which of the following substances would move the above equilibrium to the right?
- A Hydrogen
 - B Hydrogen chloride
 - C Sodium chloride
 - D Sodium hydroxide

16. When 3.6 g of butanal (mass of one mole = 72 g) was burned, 124 kJ of energy was released. What is the enthalpy of combustion of butanal, in kJ mol^{-1} ?
- A -6.2
 - B $+6.2$
 - C -2480
 - D $+2480$

17. Consider the reaction pathways shown below.

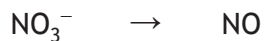


According to Hess's Law, the enthalpy change, in kJ mol^{-1} , for reaction X is

- A +111
 - B -111
 - C -677
 - D +677.
18. $\text{SO}_3^{2-}\text{(aq)} + \text{H}_2\text{O}(\ell) \rightarrow \text{SO}_4^{2-}\text{(aq)} + 2\text{H}^+\text{(aq)} + 2\text{e}^-$

Which of the following ions could be used to oxidise sulfite ions to sulfate ions?

- A $\text{Cr}^{3+}\text{(aq)}$
 - B $\text{Al}^{3+}\text{(aq)}$
 - C $\text{Fe}^{3+}\text{(aq)}$
 - D $\text{Sn}^{4+}\text{(aq)}$
19. During a redox reaction nitrate ions, NO_3^- , are converted to nitrogen monoxide, NO.



Which line in the table correctly completes the ion-electron equation?

	<i>Reactants</i>	<i>Products</i>
A	$6\text{H}^+ + 5\text{e}^-$	$3\text{H}_2\text{O}$
B	$4\text{H}^+ + 3\text{e}^-$	$2\text{H}_2\text{O}$
C	6H^+	$3\text{H}_2\text{O} + 5\text{e}^-$
D	4H^+	$2\text{H}_2\text{O} + 3\text{e}^-$



Which line in the table identifies correctly the changes that will cause the greatest increase in the proportion of solid in the above equilibrium mixture?

	<i>Temperature</i>	<i>Pressure</i>
A	decrease	decrease
B	decrease	increase
C	increase	decrease
D	increase	increase

[END OF SECTION 1. NOW ATTEMPT THE QUESTIONS IN SECTION 2
OF YOUR QUESTION AND ANSWER BOOKLET.]

FOR OFFICIAL USE



National
Qualifications
2018

Mark

X713/76/01

**Chemistry
Section 1 — Answer Grid
and Section 2**

MONDAY, 21 MAY
9:00 AM – 11:30 AM



Fill in these boxes and read what is printed below.

Full name of centre

Town

Forename(s)

Surname

Number of seat

Date of birth

Day

Month

Year

Scottish candidate number

Total marks — 100

SECTION 1 — 20 marks

Attempt ALL questions.

Instructions for the completion of Section 1 are given on *page 02*.

SECTION 2 — 80 marks

Attempt ALL questions.

You may refer to the Chemistry Data Booklet for Higher and Advanced Higher.

Write your answers clearly in the spaces provided in this booklet. Additional space for answers and rough work is provided at the end of this booklet. If you use this space you must clearly identify the question number you are attempting. Any rough work must be written in this booklet. You should score through your rough work when you have written your final copy.

Use **blue** or **black** ink.

Before leaving the examination room you must give this booklet to the Invigilator; if you do not, you may lose all the marks for this paper.



The questions for Section 1 are contained in the question paper X713/76/02.

Read these and record your answers on the answer grid on *page 03* opposite.

Use **blue** or **black** ink. Do NOT use gel pens or pencil.

1. The answer to each question is **either** A, B, C or D. Decide what your answer is, then fill in the appropriate bubble (see sample question below).
2. There is **only one correct** answer to each question.
3. Any rough working should be done on the additional space for answers and rough work at the end of this booklet.

Sample question

To show that the ink in a ball-pen consists of a mixture of dyes, the method of separation would be:

- A fractional distillation
- B chromatography
- C fractional crystallisation
- D filtration.

The correct answer is **B** — chromatography. The answer **B** bubble has been clearly filled in (see below).

A	B	C	D
<input type="radio"/>	<input checked="" type="radio"/>	<input type="radio"/>	<input type="radio"/>

Changing an answer

If you decide to change your answer, cancel your first answer by putting a cross through it (see below) and fill in the answer you want. The answer below has been changed to **D**.

A	B	C	D
<input type="radio"/>	<input checked="" type="radio"/>	<input type="radio"/>	<input type="radio"/>
	<input checked="" type="radio"/>		<input checked="" type="radio"/>

If you then decide to change back to an answer you have already scored out, put a tick (✓) to the **right** of the answer you want, as shown below:

A	B	C	D	or	A	B	C	D
<input type="radio"/>	<input checked="" type="radio"/>	<input type="radio"/>	<input checked="" type="radio"/>		<input type="radio"/>	<input checked="" type="radio"/>	<input type="radio"/>	<input type="radio"/>
	<input checked="" type="radio"/>		<input checked="" type="radio"/>			<input checked="" type="radio"/>		



SECTION 1 — Answer Grid



	A	B	C	D
1	<input type="radio"/>	<input type="radio"/>	<input type="radio"/>	<input type="radio"/>
2	<input type="radio"/>	<input type="radio"/>	<input type="radio"/>	<input type="radio"/>
3	<input type="radio"/>	<input type="radio"/>	<input type="radio"/>	<input type="radio"/>
4	<input type="radio"/>	<input type="radio"/>	<input type="radio"/>	<input type="radio"/>
5	<input type="radio"/>	<input type="radio"/>	<input type="radio"/>	<input type="radio"/>
6	<input type="radio"/>	<input type="radio"/>	<input type="radio"/>	<input type="radio"/>
7	<input type="radio"/>	<input type="radio"/>	<input type="radio"/>	<input type="radio"/>
8	<input type="radio"/>	<input type="radio"/>	<input type="radio"/>	<input type="radio"/>
9	<input type="radio"/>	<input type="radio"/>	<input type="radio"/>	<input type="radio"/>
10	<input type="radio"/>	<input type="radio"/>	<input type="radio"/>	<input type="radio"/>
11	<input type="radio"/>	<input type="radio"/>	<input type="radio"/>	<input type="radio"/>
12	<input type="radio"/>	<input type="radio"/>	<input type="radio"/>	<input type="radio"/>
13	<input type="radio"/>	<input type="radio"/>	<input type="radio"/>	<input type="radio"/>
14	<input type="radio"/>	<input type="radio"/>	<input type="radio"/>	<input type="radio"/>
15	<input type="radio"/>	<input type="radio"/>	<input type="radio"/>	<input type="radio"/>
16	<input type="radio"/>	<input type="radio"/>	<input type="radio"/>	<input type="radio"/>
17	<input type="radio"/>	<input type="radio"/>	<input type="radio"/>	<input type="radio"/>
18	<input type="radio"/>	<input type="radio"/>	<input type="radio"/>	<input type="radio"/>
19	<input type="radio"/>	<input type="radio"/>	<input type="radio"/>	<input type="radio"/>
20	<input type="radio"/>	<input type="radio"/>	<input type="radio"/>	<input type="radio"/>



[BLANK PAGE]

DO NOT WRITE ON THIS PAGE



* X 7 1 3 7 6 0 1 0 4 *

[Turn over for next question

DO NOT WRITE ON THIS PAGE



* X 7 1 3 7 6 0 1 0 5 *

SECTION 2 — 80 marks

Attempt ALL questions

1. The elements of group 7 in the periodic table are known as the halogens.
- (a) Going down group 7 the electronegativity of the halogens decreases.
- (i) State what is meant by the term *electronegativity*. 1
- (ii) Explain why electronegativity values decrease going down group 7. 1
- (b) Explain **fully** why the boiling points of the halogens increase going down group 7. 3
In your answer you should name the intermolecular forces involved.



* X 7 1 3 7 6 0 1 0 6 *

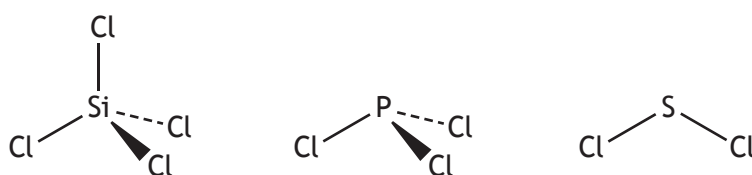
2. The elements sodium to argon form the third period of the periodic table.

(a) Explain the decrease in atom size going across the third period from sodium to argon.

1

(b) Elements in the third period of the periodic table form chlorides.

The structures of three of these chlorides are shown.



(i) Circle the structure of the molecule above that contains **bonds** with the lowest polarity.

1

(An additional diagram, if required, can be found on *page 37*).

(ii) Explain **fully** why, of these three chlorides, silicon tetrachloride is the most soluble in hexane.

2

[Turn over



2. (continued)

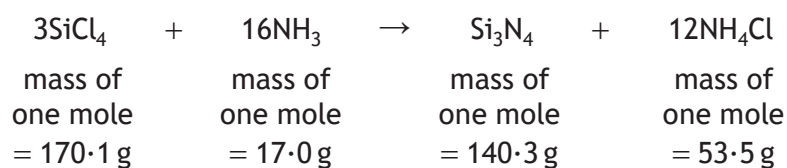
(c) Silicon tetrachloride can be used to make silicon nitride (Si_3N_4), a compound found in many cutting tools.

(i) Silicon nitride has a melting point of 1900°C and does not conduct electricity when molten.

Explain **fully**, in terms of structure and bonding, why silicon nitride has a high melting point.

2

(ii) An equation for the formation of silicon nitride is shown.



Calculate the atom economy for the formation of silicon nitride.

2



2. (continued)

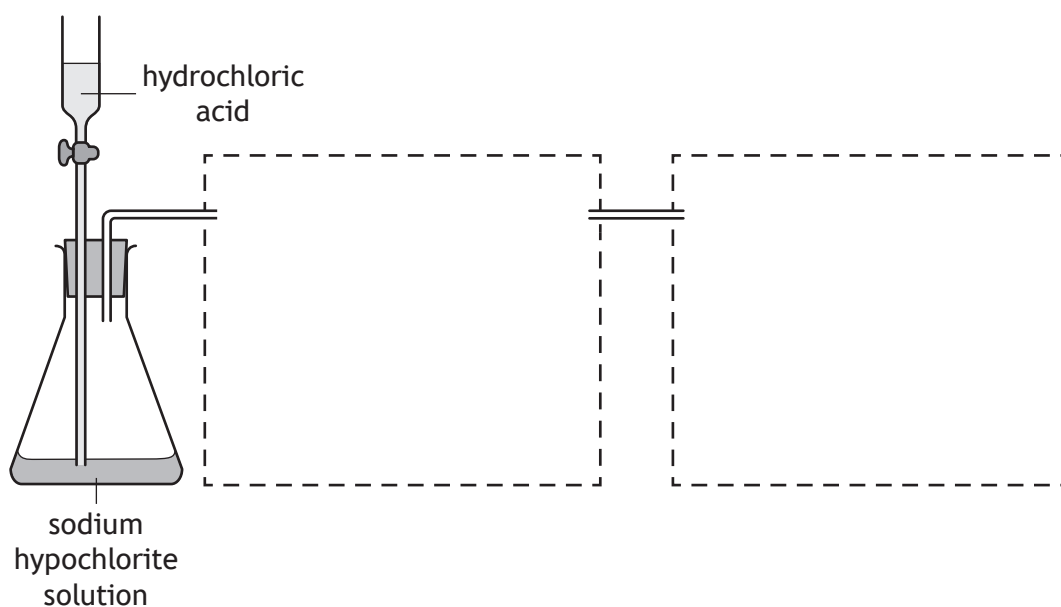
(d) Aluminium, another element in the third period, also forms a chloride. Aluminium chloride is prepared by reacting aluminium metal and chlorine gas.

Chlorine gas is produced by the reaction between hydrochloric acid and sodium hypochlorite. The chlorine is then passed over heated aluminium foil, forming aluminium chloride as a hot gas. The hot aluminium chloride gas and unreacted chlorine gas are passed into a flask where the aluminium chloride cools to a fine white powder.

For safety it is important that any unreacted chlorine gas can escape from the flask.

(i) Complete a labelled diagram to show an apparatus suitable for carrying out this preparation. 2

(An additional diagram, if required, can be found on *page 37*).

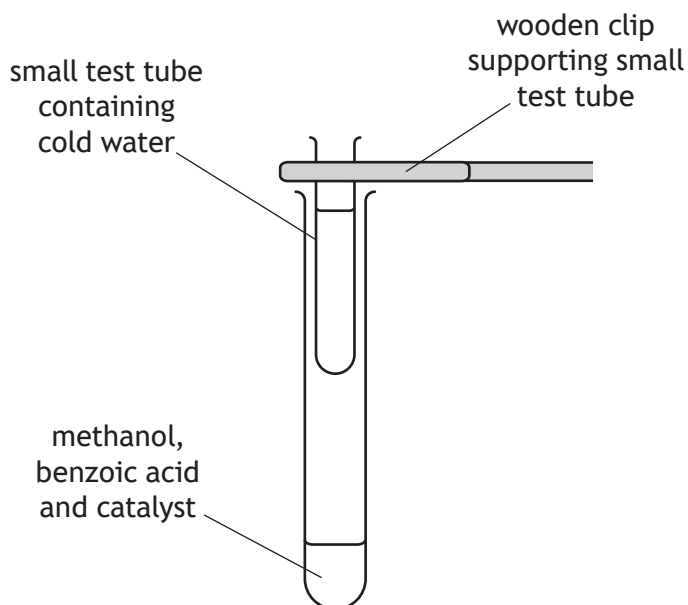


(ii) Explain why the aluminium foil needs to be heated at the start of the preparation, despite the reaction being highly exothermic. 1

[Turn over



3. Methyl benzoate is commonly added to perfumes as it has a pleasant smell. A student carries out a reaction to produce methyl benzoate using the following apparatus.



- (a) The reaction mixture needs to be heated.
Describe a safe method of heating a flammable mixture.

1

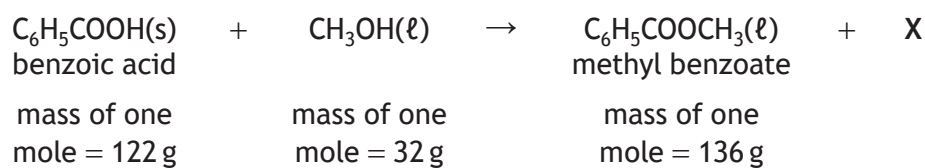
- (b) Suggest a reason why there is a small test tube filled with cold water in the neck of the tube containing the reaction mixture.

1



3. (continued)

(c) The chemical reaction involved in the experiment is shown.



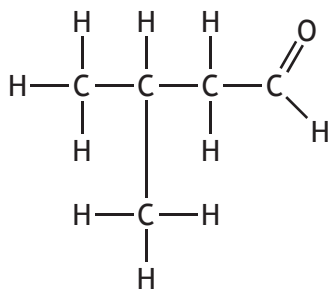
(i) Name product X. 1

(ii) In a laboratory experiment, a student used 5.0 g of benzoic acid and 2.5 g of methanol to produce methyl benzoate.
 Explain why benzoic acid is the limiting reactant.
 You must include calculations in your answer. 2

(iii) The student produced 3.1 g of methyl benzoate from 5.0 g of benzoic acid. Benzoic acid costs £39.80 for 500 g.
 Calculate the cost, in £, of the benzoic acid needed to make 100 g of methyl benzoate using the student's method. 2



4. 3-Methylbutanal is a compound that is found in low concentrations in many types of food. The structure of 3-methylbutanal is shown.



- (a) Draw a structural formula for a ketone that is an isomer of 3-methylbutanal. 1

- (b) Name a reagent which could be used to distinguish between 3-methylbutanal and a ketone. 1

- (c) Name the strongest intermolecular force that occurs between 3-methylbutanal molecules. 1



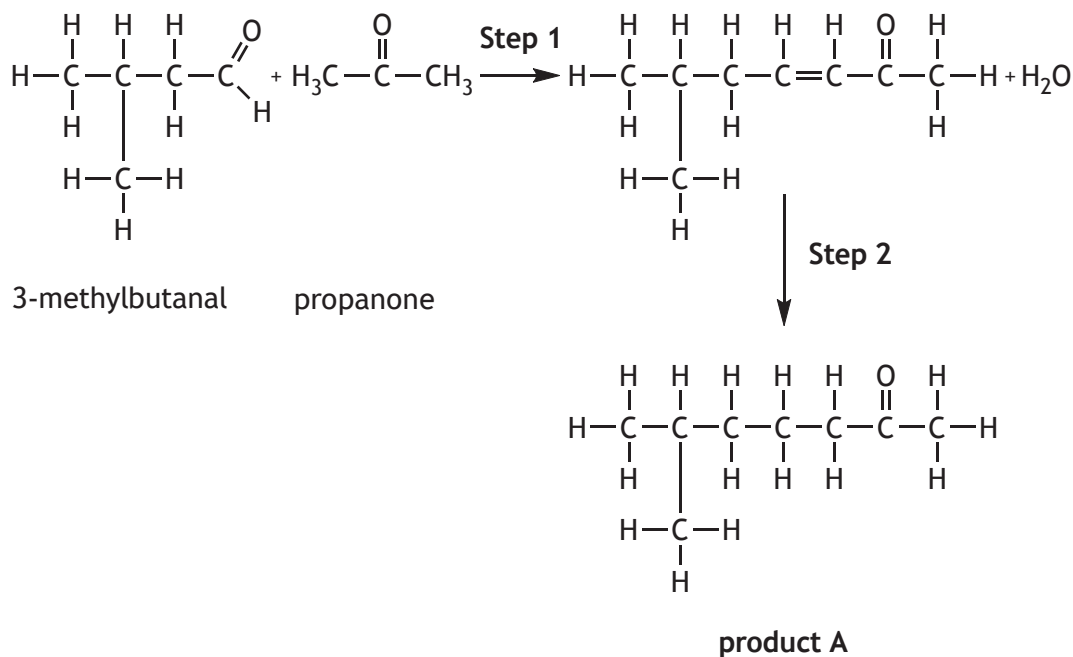
4. (continued)

(d) 3-Methylbutanal is found in olive oil.

2

Explain **fully** what can happen to 3-methylbutanal that will cause the olive oil to develop an unpleasant taste.

(e) 3-Methylbutanal can be used as a reactant in the production of other compounds. One reaction scheme involving 3-methylbutanal is shown.



(i) Explain why **step 1** is described as a condensation reaction.

1

(ii) Give the systematic name for **product A**.

1



MARKS

DO NOT
WRITE IN
THIS
MARGIN

5. Many chemical compounds are related to each other by their structural features, the way they are made and how they are used.

Using your knowledge of chemistry, describe the relationships between fats, oils, detergents, soaps and emulsifiers.

3



* X 7 1 3 7 6 0 1 1 4 *

[Turn over for next question

DO NOT WRITE ON THIS PAGE

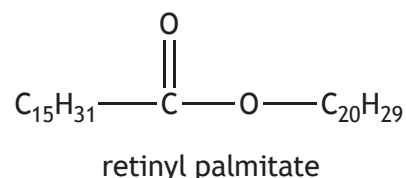


* X 7 1 3 7 6 0 1 1 5 *

6. Skin creams contain many different chemicals.

(a) Retinol (vitamin A) promotes cell regeneration.

One method of supplying retinol to the skin is by using a skin cream containing the compound retinyl palmitate.



Retinyl palmitate is absorbed into the skin and then broken down to form retinol.

(i) Name the type of reaction that occurs when retinyl palmitate is broken down to form retinol. 1

(ii) Write a molecular formula for retinol. 1


(b) Skin creams often contain vitamin E to prevent damage to the skin caused by free radicals.

(i) Describe how free radicals are formed. 1



6. (b) (continued)

- (ii) Hydroxyl free radicals ($\bullet\text{OH}$) can attack fatty acids present in cell membranes. One step in the chain reaction is shown below.



State the name given to this step in the chain reaction.

1

- (iii) The antioxidant vitamin E is a free radical scavenger.

State how free radical scavengers prevent further chain reactions.

1

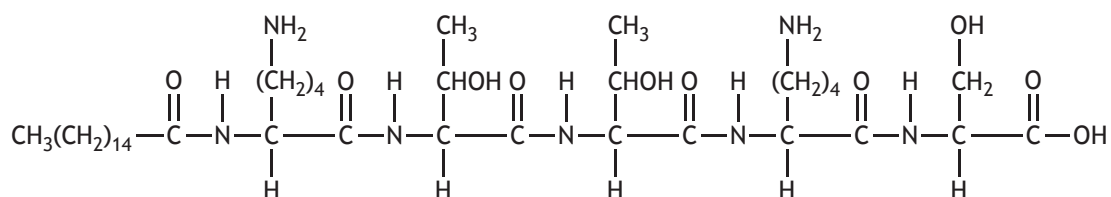
[Turn over



* X 7 1 3 7 6 0 1 1 7 *

6. (continued)

(c) Palmitoyl pentapeptide-4 is also used in skin creams.



(i) Circle a peptide link in the above structure.

1

(An additional diagram, if required, can be found on page 37).

(ii) Palmitoyl pentapeptide-4 is formed from palmitic acid and three different amino acids.

Molecule	Number of molecules used to form one molecule of palmitoyl pentapeptide-4
palmitic acid	1
threonine	2
serine	1
lysine	2

Draw a structural formula for the amino acid serine.

1



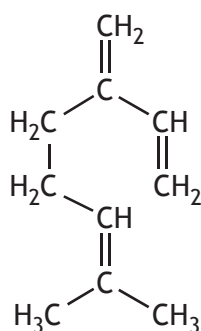
7. Terpenes consist of joined isoprene units (2-methylbuta-1,3-diene). They are classified by the number of isoprene units in the molecule.

<i>Class of terpene</i>	<i>Number of isoprene units</i>
hemiterpene	1
monoterpene	2
sesquiterpene	3
diterpene	4
triterpene	6

- (a) Myrcene and humulene are terpenes present in hops which give beer its characteristic flavour and aroma.

- (i) Circle an isoprene unit on the myrcene structure below.

1



(An additional diagram, if required, can be found on *page 38*).

- (ii) Humulene has the molecular formula $C_{15}H_{24}$.

Name the class of terpene to which humulene belongs.

1

[Turn over



* X 7 1 3 7 6 0 1 1 9 *

7. (continued)

- (b) (i) Squalene, a triterpene, is included in some flu vaccines to enhance the body's immune response. A single dose of flu vaccine contains 10.69 mg of squalene.

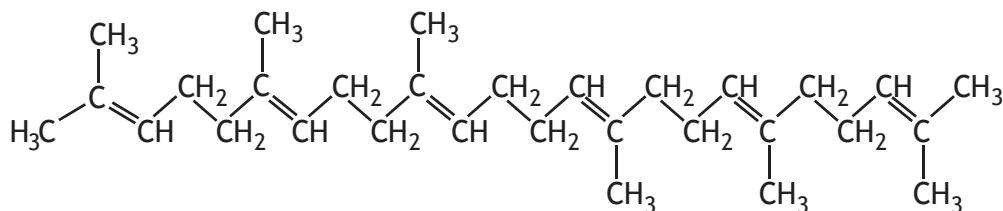
Calculate the mass of squalene required to produce a batch of 500 000 doses of flu vaccine.

Your answer must be given in kg.

2

- (ii) Squalane is a fully saturated hydrocarbon used in skin moisturising cream.

Squalane can be made by the reaction of squalene with hydrogen.



squalene

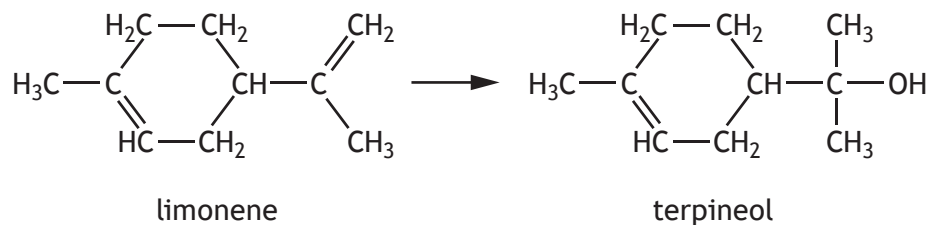
State the number of moles of hydrogen needed to fully saturate one mole of squalene to produce one mole of squalane.

1



7. (continued)

- (c) The monoterpene limonene, found in lemon oil, can be converted into the alcohol, terpineol.



- (i) Name the type of reaction taking place.

1

- (ii) When terpineol is heated with copper(II) oxide, no reaction takes place.

Explain why no reaction takes place.

1

[Turn over



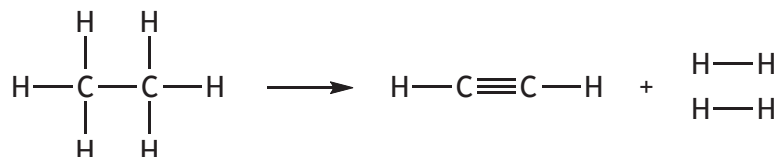
* X 7 1 3 7 6 0 1 2 1 *

8. The alkynes are a homologous family of hydrocarbons.

- (a) The simplest member of the family is ethyne, C_2H_2 , used in welding torches.



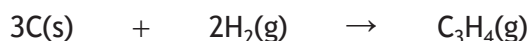
Ethyne can be produced from ethane.



Using bond enthalpies and mean bond enthalpies from the data book, calculate the enthalpy change, in kJ mol^{-1} , for this reaction.

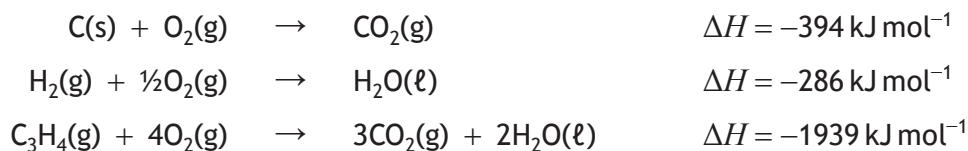
2

- (b) Hess's Law can be used to calculate the enthalpy change for reactions that do not normally take place, such as the formation of propyne from its elements.



Calculate the enthalpy change, in kJ mol^{-1} , for this reaction using the following information.

2



* X 7 1 3 7 6 0 1 2 2 *

8. (continued)

(c) Propyne, C_3H_4 (1 mole = 40 g), has been suggested as a possible rocket fuel.

(i) The enthalpy of combustion of propyne is $-1939 \text{ kJ mol}^{-1}$.

Calculate the energy released, in kJ, when 1 kg of propyne is burned completely.


1

(ii) The mass of air required to burn 1 g of fuel can be calculated using the relationship shown.

Mass of air, in g = $4.3 \times$ mass of oxygen, in g, for complete combustion of 1 g of fuel

Calculate the mass of air, in g, required to burn 1 g of propyne.

2



* X 7 1 3 7 6 0 1 2 3 *

8. (c) (continued)

(iii) The table shows the mass of air required to burn 1 g of different fuels.

<i>Fuel</i>	<i>Mass of 1 mole (g)</i>	<i>Mass of air required to burn 1 g</i>
ethane	30	16.1
propane	44	15.6
methanol	32	6.5
ethanol	46	9.0

Suggest why methanol and ethanol, compared to the other fuels, require less air to burn 1 g.

1



[Turn over for next question

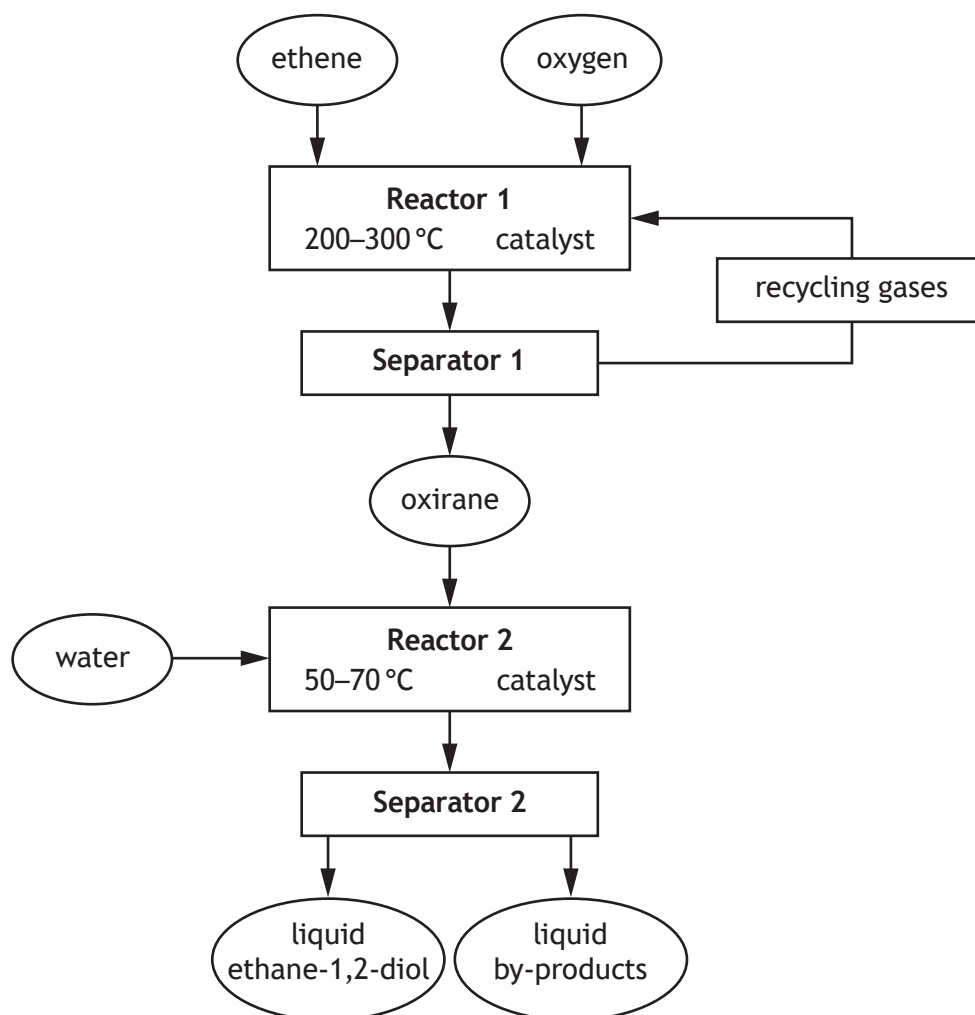
DO NOT WRITE ON THIS PAGE



* X 7 1 3 7 6 0 1 2 5 *

9. Ethane-1,2-diol can be made from ethene.

(a) The flow chart of an industrial process to produce ethane-1,2-diol is shown.



(i) Industrial processes are designed to maximise profit.

Using the flowchart, suggest two ways to maximise profit in this industrial process.

2



9. (a) (continued)

- | | |
|--|---|
| (ii) Name the process used in Separator 2 to separate ethane-1,2-diol from the larger liquid by-products. | 1 |
| | |
| (b) Explain fully why ethane-1,2-diol is more viscous than propan-1-ol. | 2 |
| | |
| (c) Draw a structural formula for a diol that contains three carbon atoms. | 1 |

[Turn over



* X 7 1 3 7 6 0 1 2 7 *

9. (continued)

(d) Ethane-1,2-diol has been found to be harmful to animals. Treatment for affected animals involves using a 20% ethanol solution.

- (i) The 20% ethanol solution is prepared by accurately measuring 20 cm^3 of ethanol and then making up to exactly 100 cm^3 with water.

Describe the procedure which should be used to prepare 100 cm^3 of the 20% ethanol solution.

2

- (ii) An affected animal must be treated with 9 doses of 20% ethanol solution. Each dose contains 5 cm^3 of the ethanol solution for every kilogram body mass of the animal.

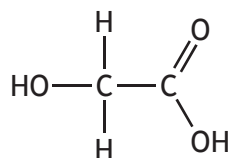
Calculate the total volume, in cm^3 , of the 20% ethanol solution needed to treat a 3.5 kg animal.

1



9. (d) (continued)

(iii) Ethane-1,2-diol is harmful because it is oxidised in the body to form glycolic acid.



glycolic acid

(A) Draw a structural formula for another possible product of oxidation of ethane-1,2-diol. 1

(B) Glycolic acid can be neutralised by sodium hydroxide to form sodium glycolate. 1
 Give a formula for sodium glycolate.

[Turn over



10. The molar volume (in units of litres per mole) is the same for all gases at the same temperature and pressure.

Using your knowledge of chemistry, suggest how the molar volume of gases could be measured and compared. Any suitable chemicals and apparatus can be used. Some suggested chemicals and apparatus are given below.

3

<i>Chemicals</i>	<i>Apparatus</i>
hydrochloric acid	gas syringe
zinc	measuring cylinder
magnesium	delivery tube
calcium	stoppers
water	500 cm ³ flask
sodium carbonate	vacuum pump
calcium carbonate	balance
cylinder of nitrogen	cork ring
cylinder of hydrogen	burette
cylinder of carbon dioxide	filter funnel



* X 7 1 3 7 6 0 1 3 0 *

MARKS

DO NOT
WRITE IN
THIS
MARGIN

10. (continued)

[Turn over



* X 7 1 3 7 6 0 1 3 1 *

11. Iodine is required for a healthy diet. Food grown in certain parts of the world is low in iodine. To prevent iodine deficiency in people's diets, table salt can be 'iodised' by the addition of very small quantities of potassium iodide, KI.

The number of moles of iodide in a sample of salt can be determined by the following procedure.

Step 1

Prepare a standard salt solution by dissolving an accurately weighed sample of iodised salt (50.0 g) in water to give a final volume of 250 cm³.

Step 2

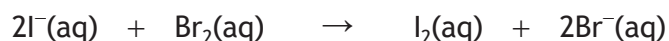
Transfer 50 cm³ of salt solution to a conical flask and add excess bromine solution to convert the iodide ions to iodine.

Step 3

Titrate the iodine (I₂) released with sodium thiosulfate solution (Na₂S₂O₃).

- (a) Describe a procedure to accurately weigh out a 50.0 g sample of iodised table salt. 1

- (b) The overall equation for the reaction of bromine solution with iodide ions is shown.



Write the ion-electron equation for the oxidation reaction. 1



* X 7 1 3 7 6 0 1 3 2 *

11. (continued)

- (c) Three samples were prepared as described in **step 2**. Each sample was titrated with $0.0010 \text{ mol l}^{-1}$ sodium thiosulfate solution.

The results are shown below.


<i>Sample</i>	<i>Volume of sodium thiosulfate (cm³)</i>
1	10.0
2	9.4
3	9.6

- (i) Calculate the average volume, in cm^3 , of sodium thiosulfate solution that should be used to determine the number of moles of iodine released.

1

- (ii) Calculate the number of moles of iodine released from 50 cm^3 of the standard salt solution.

2





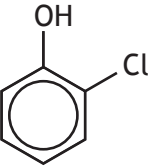

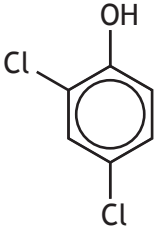
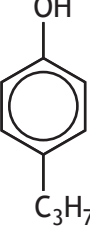
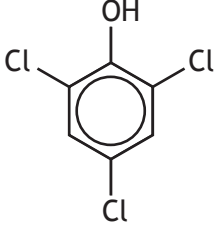
[Turn over



* X 7 1 3 7 6 0 1 3 3 *

12. Many modern antiseptics are based on phenol. The table shows the germ-killing power of some phenol compounds.

(a)

Compound	Structure	Germ-killing power (relative to phenol)
phenol		1.0
4-methylphenol		2.5
2-chlorophenol		3.6
4-ethylphenol		7.5
2,4-dichlorophenol		13.0
4-propylphenol		20.0
2,4,6-trichlorophenol		23.0



* X 7 1 3 7 6 0 1 3 4 *

12. (a) (continued)

- (i) Suggest two ways in which structural features increase germ-killing power of phenol compounds.

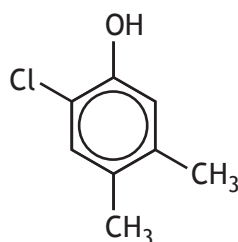
2

- (ii) The names of the phenol compounds in the table are derived from their structures using the following rules.

Phenol is used as the parent name for the compound.

1. The $-OH$ functional group is assigned as being on carbon 1 of the ring.
2. The ring can be numbered clockwise or anticlockwise to assign numbers to the other atoms or groups. The numbers should be assigned so that the lowest possible numbers are used.
3. If two or more identical atoms or groups are present, use one of the prefixes di, tri or tetra.
4. The names of the atoms or groups attached to the ring are listed alphabetically (ignoring the prefixes for alphabetical purposes).

Using these rules, name this molecule.



1

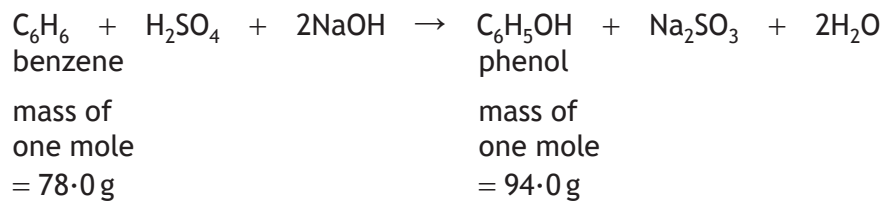
[Turn over



12. (continued)

(b) There are different methods of producing phenol.

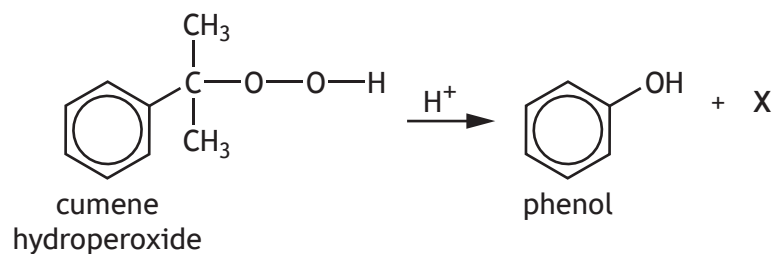
(i) In the early 1900s, phenol was produced by the following reaction.



Calculate the mass of phenol, in kg, produced from 117 kg of benzene if the percentage yield is 90%.

2

(ii) Phenol is now usually produced by the Cumene Process.



Name the other product, X, formed in the Cumene Process.

1

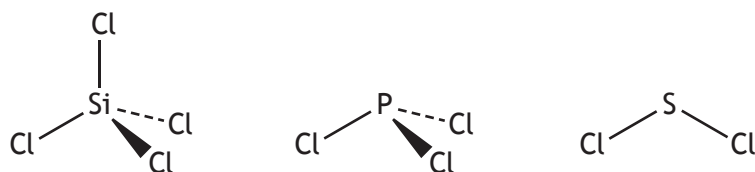
[END OF QUESTION PAPER]



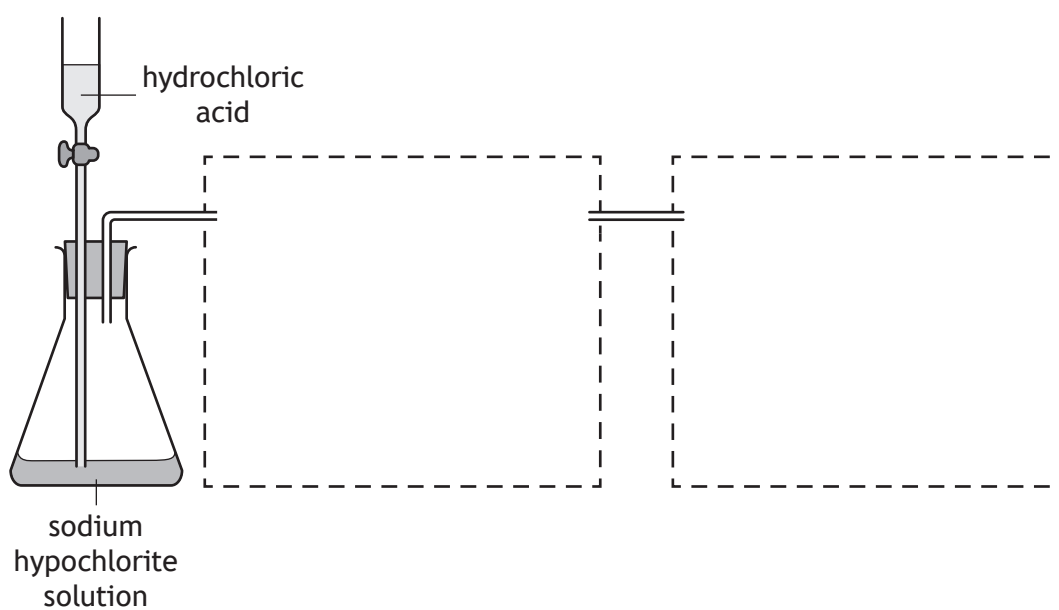
* X 7 1 3 7 6 0 1 3 6 *

ADDITIONAL SPACE FOR ANSWERS AND ROUGH WORK

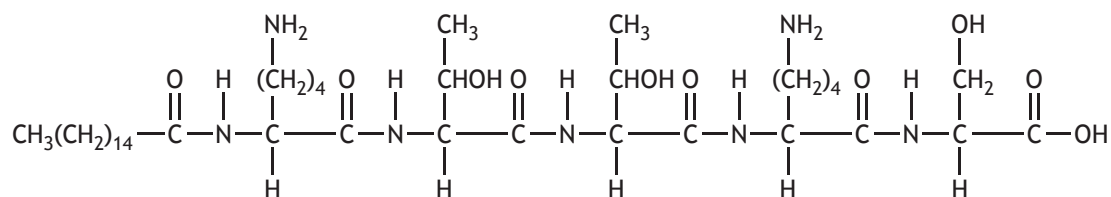
ADDITIONAL DIAGRAM FOR USE IN QUESTION 2 (b)



ADDITIONAL DIAGRAM FOR USE IN QUESTION 2 (d) (i)



ADDITIONAL DIAGRAM FOR USE IN QUESTION 6 (c) (i)

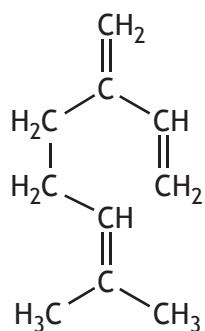


MARKS

DO NOT
WRITE IN
THIS
MARGIN

ADDITIONAL SPACE FOR ANSWERS AND ROUGH WORK

ADDITIONAL DIAGRAM FOR USE IN QUESTION 7 (a) (i)



* X 7 1 3 7 6 0 1 3 8 *

MARKS

DO NOT
WRITE IN
THIS
MARGIN

ADDITIONAL SPACE FOR ANSWERS AND ROUGH WORK



* X 7 1 3 7 6 0 1 3 9 *

MARKS

DO NOT
WRITE IN
THIS
MARGIN

ADDITIONAL SPACE FOR ANSWERS AND ROUGH WORK



* X 7 1 3 7 6 0 1 4 0 *